



Calculate Time Duration

FREE Worksheet - 1

Time: 10 minutes

(Detailed solutions at the end)

1. What time is 2 hours after 9.20 p.m.?

Answer: _____

2. Jarrod went for a picnic with his family from 3.10 p.m. to 6.35 p.m.

How long was their picnic?



Answer: _____



3. How many hours are there from 9.10 p.m. to 6.10 a.m. on the next day?

Answer: _____ hours

4. Sandy packed some goodie bags for her birthday party.

She took 1 h 40 min to pack the goodie bags.

She started packing them at 7.10 p.m.

When did she finish packing them?



Answer: _____



5. Jan and his friends took 35 minutes to wash a car.

They started washing the car at 3.10 p.m.

At what time did they finish washing the car?



homecampus.com.sg


Answer: _____



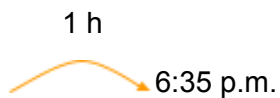
SOLUTIONS

Problem 1

Count forwards.



Problem 2



So,


$$25 \text{ min} + 3 \text{ h} = 3 \text{ h } 25 \text{ min}$$

Jarrod 's family picnic was **3 h 25 min** long.



Problem 3

Count forwards.




So,

$$3 \text{ h} + 6 \text{ h} = 9 \text{ hours}$$

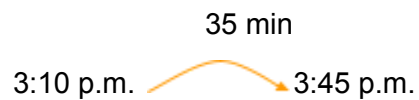
There are **9 hours** from 9.10 pm to 6.10 am on the next day.

Problem 4



Sandy finished packing goodie bags at **8.50 p.m.**

Problem 5



Jan and his friends finished washing the car at **3.45 p.m.**