



Missing Number Patterns

FREE Worksheet - 5

Time: 10 minutes

(Detailed solutions at the end)

1. What is the missing number in the number pattern below?

6738, 6538, 6338, 6138, _____

- | | |
|---------|---------|
| a. 5838 | b. 5928 |
| c. 5938 | d. 6038 |

2. A counting tape has numbers arranged in a pattern. Find the missing number in the counting tape below.

5881, 5181, 4481, 3781, _____

- | | |
|---------|---------|
| a. 3081 | b. 3071 |
| c. 3181 | d. 2981 |

3. Shakira has some paper boats with numbers on them that she is arranging in a pattern. What is the missing number in Shakira's pattern?

7907, 7807, 7707, _____, 7507

- | | |
|---------|---------|
| a. 7597 | b. 7407 |
| c. 7807 | d. 7607 |
-



4. What is the missing number in the number pattern below?

7078, 7378, 7678, _____, 8278

Answer: _____

5. Anika has some paper balls with numbers on them that she is arranging in a pattern. What is the missing number in Anika's pattern?

1702, 2102, _____, 2902, 3302

Answer: _____

6. Sonia has some tiles with numbers on them that she is arranging in a pattern. What is the missing number in Sonia's pattern?

6407, _____, 6607, 6707, 6807

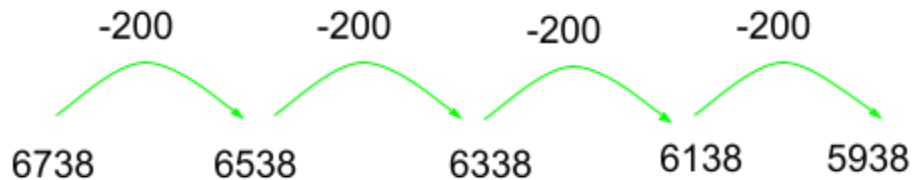
Answer: _____



SOLUTIONS

Problem 1

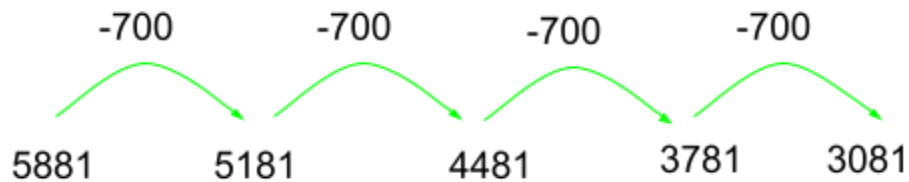
Rule: Subtract 200 to get the next number.



The missing number is **5938**.

Problem 2

Rule: Subtract 700 to get the next number.

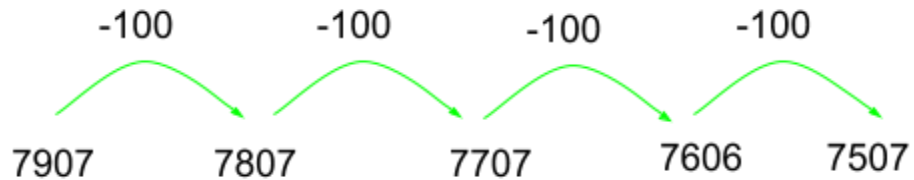


The missing number is **3081**.



Problem 3

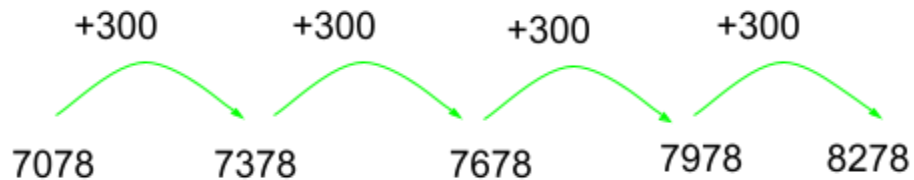
Rule: Subtract 100 to get the next number.



The missing number is **7607**.

Problem 4

Rule: Add 300 to get the next number.

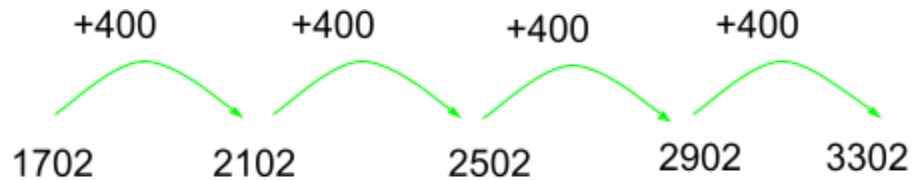


The missing number is **7978**.



Problem 5

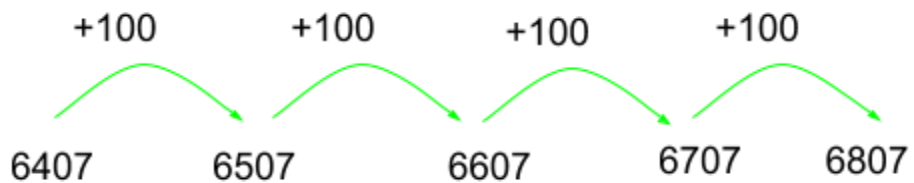
Rule: Add 400 to get the next number.



The missing number is **2502**.

Problem 6

Rule: Add 100 to get the next number.



The missing number is **6507**.